

2 Basic Operations

2.1 Place Value

This section deals with the revision of place value. Remember that we write decimal numbers in the form:

Thousands Hundreds Tens Units • Tenths Hundredths Thousandths




Example 1

Here are some number cards:



You can use each card *once* to make the number 1735, like this:



- (a) What is the *biggest* number you can make with the four cards?
- (b) Explain why you *cannot* make an *even* number with the four cards.

(KS3/99/Ma/Tier 3-5/P2)



Solution

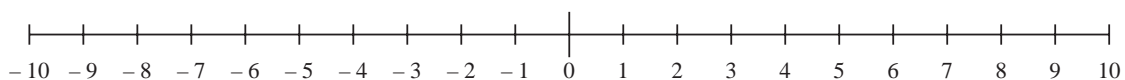
- (a) The biggest number, using all four cards, is

7531

(this is because $7 > 5 > 3 > 1$).

- (b) To make an even number, the last digit must be even, but all four cards in this example show odd digits.

Note: It is often helpful to refer to a number line when comparing values; a number line can also show negative values:



Remember that the symbol $<$ means 'less than' and $>$ means 'greater than'.



Example 2

Put the correct sign, $<$ or $=$ or $>$, into each sentence.

- (a) -7 -2
 (b) $3 - 2$ -5
 (c) $3 - 5$ $4 - 6$

(KS3/99/Ma/Tier 4-6/P1)



Solution

- (a) From the number line shown, $-7 < -2$.
 (b) Since $3 - 2 = 1$, the comparison is $1 \dots -5$, so that $1 > -5$ (see number line).
 (c) Here we compare $-2 \dots -2$, giving $-2 = -2$.



Example 3

The arrow on this thermometer shows a temperature of 10°C .

- (a) Draw an arrow on the thermometer to show a temperature of 24°C .

Label the arrow 24°C .

- (b) Draw an arrow on the thermometer to show a temperature of -4°C .

Label the arrow -4°C .

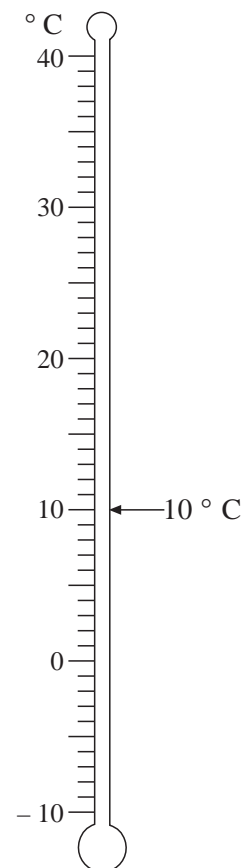
- (c) The temperature was -10°C .

It went *up* 15°C .

What is the temperature now?

- (d) Write these temperatures in order, *coldest first*.

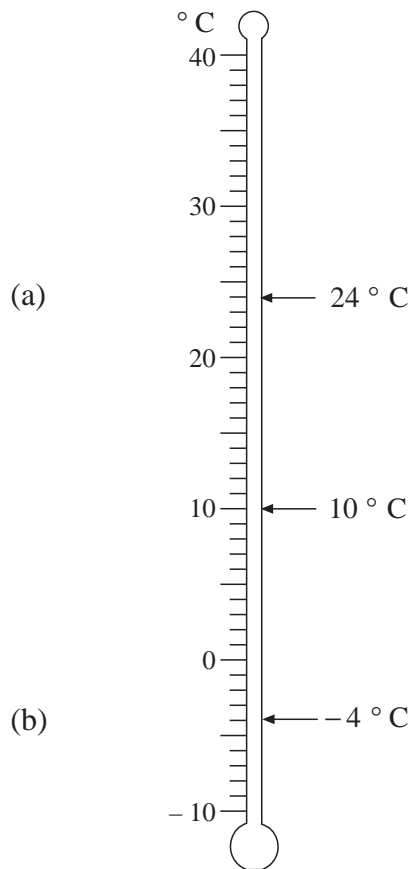
3°C , -10°C , 0°C , 20°C , -1°C



(KS3/97/Ma/Tier 3-5/P1)



Solution



(c) $-10^{\circ}\text{C} + 15^{\circ}\text{C} = 5^{\circ}\text{C}$

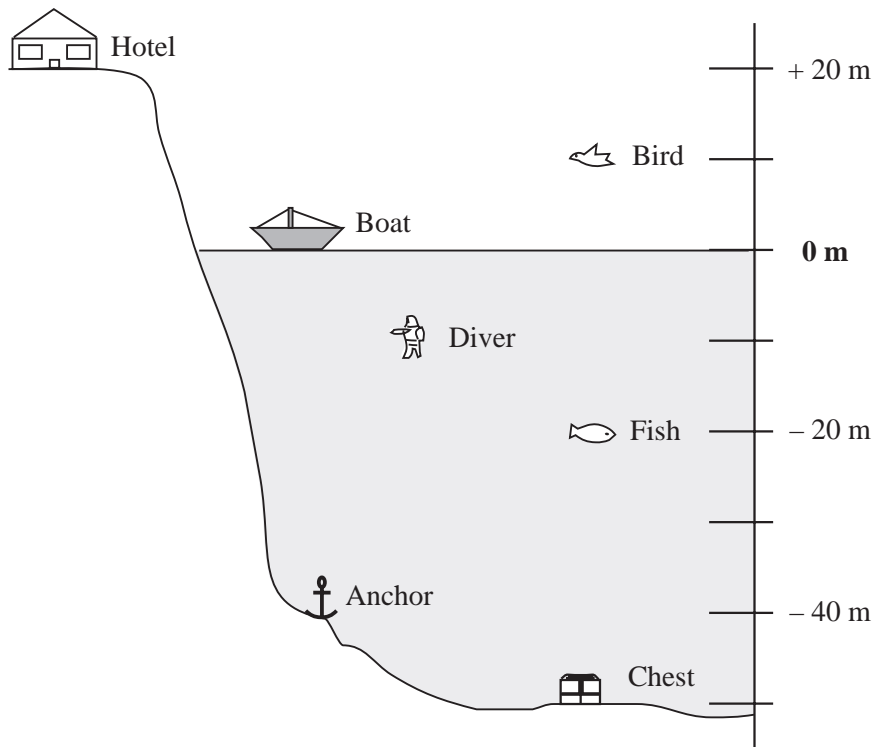
(d) -10°C , -1°C , 0°C , 3°C , 20°C



Exercises

1. (a) Write the numbers:
 - (i) one hundred and eighty,
 - (ii) two hundred and twelve,
 - (iii) one hundred and eight,
 - (iv) ninety two
- (b) Using the numbers in (a), write them in order with the smallest first.

2. Ali drew a picture to show what there is above and below the sea at Aber.



The anchor is at about -40 m.

- What is at about $+10$ m ?
- What is at about -10 m ?
- What is about 30 m higher than the chest?

(KS3/95/Ma/Levels 3-5/P1)

3. Write down each number sentence putting in one of the signs, $<$ or $=$ or $>$, to make it correct.

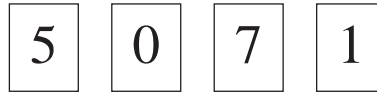
- $8 + 2 \dots\dots 7 + 6$
- $6 - 3 \dots\dots 1 + 2$
- $0 \dots\dots -3$

(KS3/99/Ma/Levels 3-5/P1)

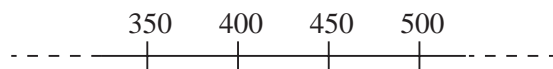
4. Write the following sums of money in pounds, in decimal form.

- Seventy two pounds, forty five pence.
- One hundred and three pounds, fifty pence.
- One hundred and thirty pounds, five pence.

5. Here are some number cards:



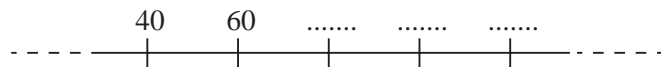
- (a) What is the *largest* possible number you can make, using all four cards?
- (b) What is the *smallest* possible number, using all four cards but starting with a non-zero digit?
- (c) What is the *smallest* possible number you can make, using only three of the cards and starting with a non-zero digit?
6. (a) Look at this part of a number line:




Copy and complete this sentence:

The numbers on this number line go *up* in steps of

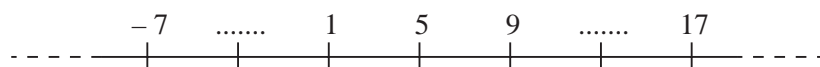
- (b) This is a *different* number line.
What are the 3 missing numbers?



- (c) This is a *different* number line.
What are the 3 missing numbers?



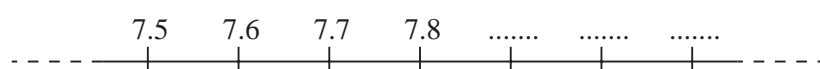
- (d) This is a *different* number line.
What are the 2 missing numbers?



Copy and complete this sentence:

The numbers on this number line go *up* in steps of

- (e) This is a *different* number line.
What are the 3 missing numbers?



Copy and complete this sentence:

The numbers on this number line go *up* in steps of

2.2 Addition and Subtraction

This section deals with the revision of addition and subtraction of both whole numbers and decimals; we also look again at the use of brackets. You are *not* expected to use a calculator in this section.



Example 1

Calculate:

(a) $1142 + 363$

(b) $4478 - 227$



Solution

$$\begin{array}{r} 1142 \\ + 363 \\ \hline 1505 \\ \hline \end{array}$$

$$\begin{array}{r} 4478 \\ - 227 \\ \hline 4251 \\ \hline \end{array}$$

Note that it is important to *line up* the numbers with the *same place value*.



Example 2

Calculate:

(a) $14 - (8 + 3)$

(b) $16 - (12 - 3)$



Solution

Remember to carry out the calculations in the *brackets first*.

$$\begin{aligned} \text{(a)} \quad 14 - (8 + 3) &= 14 - 11 \\ &= 3 \end{aligned}$$

$$\begin{aligned} \text{(b)} \quad 16 - (12 - 3) &= 16 - 9 \\ &= 7 \end{aligned}$$



Example 3

Calculate:

(a) $6.27 + 13.4$

(b) $17.6 - 8.31$



Solution

Remember to *line up* the decimal points.

$$\begin{array}{r} 6.27 \\ + 13.40 \\ \hline 19.67 \\ \hline \end{array}$$

$$\begin{array}{r} \begin{array}{cccc} 0 & 1 & 5 & 1 \\ \cancel{1}7 & . & \cancel{6}0 \end{array} \\ - 8.31 \\ \hline 9.29 \\ \hline \end{array}$$



Example 4

Ben has £17.50 when he goes out shopping. He spends £1.23 on sweets and £12.99 on a CD.

- (a) How much does he spend in total?
 (b) How much money does he have left?



Solution

(a)

$$\begin{array}{r} 1 \text{ . } 23 \\ + 12 \text{ . } 99 \\ \hline 14 \text{ . } 22 \\ \hline 1 \quad 1 \end{array}$$

He spends a total of £14.22.

(b)

$$\begin{array}{r} 17 \text{ . } 50 \\ - 14 \text{ . } 22 \\ \hline 3 \text{ . } 28 \end{array}$$

He has £3.28 left.



Exercises

1. Calculate:

- | | | |
|-----------------|----------------|------------------|
| (a) $16 + 47$ | (b) $32 + 18$ | (c) $19 + 15$ |
| (d) $66 + 82$ | (e) $37 + 92$ | (f) $44 + 126$ |
| (g) $572 + 116$ | (h) $362 + 97$ | (i) $421 + 362$ |
| (j) $46 + 712$ | (k) $381 + 56$ | (l) $182 + 1141$ |

2. Calculate:

- | | | |
|----------------|-----------------|-----------------|
| (a) $66 - 4$ | (b) $78 - 3$ | (c) $49 - 7$ |
| (d) $72 - 21$ | (e) $47 - 25$ | (f) $88 - 36$ |
| (g) $41 - 22$ | (h) $83 - 47$ | (i) $76 - 57$ |
| (j) $121 - 92$ | (k) $742 - 151$ | (l) $311 - 286$ |

3. Calculate:

- | | | |
|-------------------|-------------------|--------------------|
| (a) $3.6 + 4.2$ | (b) $5.7 + 1.2$ | (c) $6.3 + 2.6$ |
| (d) $13.2 + 1.2$ | (e) $3.72 + 4.1$ | (f) $8.1 + 13.24$ |
| (g) $3.6 + 1.724$ | (h) $8.14 + 19.7$ | (i) $11.2 + 16.31$ |

4. Calculate:
- (a) $4.7 - 2.4$ (b) $8.6 - 6.5$ (c) $3.9 - 1.4$
(d) $4.92 - 1.81$ (e) $6.91 - 2.3$ (f) $4.7 - 2.19$
(g) $3.7 - 2.17$ (h) $14.2 - 9.08$ (i) $5.6 - 4.72$
5. Calculate:
- (a) $20 - (6 + 2)$ (b) $14 - (8 - 2)$
(c) $18 - (3 + 1)$ (d) $100 - (37 - 22)$
(e) $18 - (11 + 4)$ (f) $22 - (11 + 1)$
(g) $144 - (80 + 12)$ (h) $66 - (5 + 17)$
(i) $100 - (15 - 9)$ (j) $200 - (101 + 42)$
6. Copy the following calculations and fill in the missing numbers:
- (a) $962 - \dots = 476$ (b) $\dots - 128 = 415$
(c) $3612 = \dots + 43$ (d) $7526 = \dots - 78$
7. Write one number at the end of each calculation to make it correct:
- (a) $400 + 150 = 500 + \dots$ (b) $14 + 6 = 4 + \dots$
(c) $37 - 20 = 27 - \dots$ (d) $38 + 17 = 28 + \dots$
(e) $38 - 17 = 28 - \dots$ (f) $54 - 26 = 14 + \dots$
8. There are 32 pupils in class 7DC, 28 pupils in class 7BD and 29 pupils in class 7PD.
How many pupils are there altogether in these 3 classes?
9. There are 74 people on a bus. At one stop 22 people get off. How many people are left on the bus?
10. Ben spends £4.27 in one shop and £15.99 in another shop.
(a) How much does he spend altogether?
(b) If he started with £25, how much money does he have left?
11. Bella buys a value burger meal that costs £3.28 for herself and a fun meal that costs £2.25 for her sister.
(a) How much does she spend altogether?
(b) How much change should she get from a £10 note?

12. A triangle has sides of length 18.8 cm, 14 cm and 12.75 cm. Calculate the perimeter of the triangle.
13. Look at these number cards:

+3	0	-5	+9
+2	-8	+7	-2

- (a) Choose a card to give the answer 4.

$$\boxed{+2} + \boxed{-5} + \boxed{} = 4$$

- (b) Choose a card to give the *lowest* possible answer.
Write out the calculation and work out the answer.

$$\boxed{-2} + \boxed{} = \dots$$

- (c) Choose a card to give the *lowest* possible answer.
Write out the calculation and work out the answer.

$$\boxed{-2} - \boxed{} = \dots$$

- (d) Now choose a card to give the *highest* possible answer.
Write out the calculation and work out the answer.

$$\boxed{-2} - \boxed{} = \dots$$

(KS3/97/Ma/Tier 4-6/P1)

2.3 Multiplication and Division

In this section we review multiplication and division. Again, you are *not* expected to use a calculator.



Example 1

Calculate:

- (a) 41×10 (b) 4.712×100
 (c) $62 \div 100$ (d) $23.7 \div 10$



Solution

- (a) $41 \times 10 = 410$ (b) $4.712 \times 100 = 471.2$
 (c) $62 \div 100 = 0.62$ (d) $23.7 \div 10 = 2.37$



Example 2

Calculate:

- (a) 12×24 (b) 37×15



Solution

<p>(a)</p> $\begin{array}{r} 12 \\ \times 24 \\ \hline 48 \\ 240 \\ \hline 288 \end{array}$	<p>(b)</p> $\begin{array}{r} 37 \\ \times 15 \\ \hline 185 \\ 370 \\ \hline 555 \end{array}$
---	--

Note: With all these examples, there are many ways of obtaining the correct answer; for example, in (a) above:

$$\begin{aligned} 12 \times 24 &= (10 + 2) \times 24 \\ &= (10 \times 24) + (2 \times 24) \\ &= 240 + 48 \\ &= 288 \end{aligned}$$

However, we have used the written algorithm for long multiplication as it will *always* work, whereas short-cut methods do not necessarily generalise.



Example 3

Calculate:

(a) 4.7×5

(b) 6.4×2.3



Solution

(a) Since

$$\begin{array}{r} 47 \\ \times 5 \\ \hline 235 \\ \hline 23 \end{array}$$

then

$$4.7 \times 5 = \frac{47 \times 5}{10} = \frac{235}{10} = 23.5$$

(b) Since

$$\begin{array}{r} 64 \\ \times 23 \\ \hline 192 \\ 1280 \\ \hline 1472 \\ \hline 1 \end{array}$$

then

$$6.4 \times 2.3 = \frac{64}{10} \times \frac{23}{10} = \frac{64 \times 23}{100} = \frac{1472}{100} = 14.72$$

Note: When dividing by 10, the decimal point is moved one place to the left; when dividing by 100 the decimal point is moved 2 places to the left, and so on.



Example 4

Calculate:

(a) $124 \div 4$

(b) $615 \div 5$



Solution

(a)
$$4 \overline{) 124} \begin{array}{l} 31 \\ 12 \\ \hline 12 \\ \hline 4 \end{array}$$

(b)
$$5 \overline{) 615} \begin{array}{l} 123 \\ 5 \\ \hline 615 \\ \hline 15 \end{array}$$

Again, you can use short-cut methods; for example, in (b) above:

$$\begin{aligned}
 615 \div 5 &= 615 \div \left(\frac{10}{2}\right) \\
 &= (2 \times 615) \div 10 \quad (\text{i.e. dividing by 5 is equivalent to} \\
 &\quad \text{multiplying by 2 and then dividing} \\
 &\quad \text{by 10)} \\
 &= 1230 \div 10 \\
 &= 123
 \end{aligned}$$

However, using the *standard method* for division will *always* give the correct answer.



Example 5

A chocolate bar costs 32p. Calculate the cost of 7 chocolate bars.



Solution

$$\begin{array}{r}
 32 \\
 \times 7 \\
 \hline
 224 \\
 \hline
 21
 \end{array}$$

The cost is 224p or £2.24.



Exercises

1. Calculate:

- | | | |
|----------------------|----------------------|------------------------|
| (a) 6×10 | (b) 17×100 | (c) 8×1000 |
| (d) 14×10 | (e) 321×10 | (f) 4.2×10 |
| (g) 3.6×100 | (h) 14.7×10 | (i) 0.461×100 |

2. Calculate:

- | | | |
|---------------------|----------------------|---------------------|
| (a) $4700 \div 10$ | (b) $360 \div 10$ | (c) $421 \div 10$ |
| (d) $16.8 \div 10$ | (e) $476 \div 100$ | (f) $5600 \div 100$ |
| (g) $56.2 \div 100$ | (h) $113.6 \div 100$ | (i) $0.652 \div 10$ |

3. Calculate:

- | | | |
|--------------------|--------------------|--------------------|
| (a) 15×6 | (b) 34×2 | (c) 82×7 |
| (d) 37×5 | (e) 19×6 | (f) 82×4 |
| (g) 16×12 | (h) 24×14 | (i) 32×24 |
| (j) 66×47 | (k) 84×28 | (l) 62×29 |

4. Calculate:
- | | | |
|-----------------------|-----------------------|-----------------------|
| (a) 4.7×2 | (b) 6.3×5 | (c) 11.4×5 |
| (d) 12.7×3 | (e) 14.8×4 | (f) 22.1×7 |
| (g) 1.2×3.7 | (h) 4.2×5.9 | (i) 1.24×1.6 |
| (j) 7.23×1.4 | (k) 18.2×3.2 | (l) 27.6×4.2 |
5. Calculate:
- | | | |
|-------------------|------------------|------------------|
| (a) $12 \div 4$ | (b) $81 \div 9$ | (c) $42 \div 7$ |
| (d) $24 \div 8$ | (e) $64 \div 8$ | (f) $45 \div 5$ |
| (g) $75 \div 5$ | (h) $86 \div 2$ | (i) $98 \div 7$ |
| (j) $128 \div 4$ | (k) $248 \div 4$ | (l) $497 \div 7$ |
| (m) $1917 \div 9$ | (n) $411 \div 3$ | (o) $855 \div 5$ |
6. Write out each of these calculations, filling in the missing numbers:
- | | |
|-----------------------------|--------------------------|
| (a) $6 \times \dots = 120$ | (b) $\dots \div 8 = 7$ |
| (c) $26 \times \dots = 962$ | (d) $\dots \div 24 = 16$ |
7. Write one number at the end of each calculation to make it correct:
- | | |
|-------------------------------------|---|
| (a) $6 \times 5 = 3 \times \dots$ | (b) $40 \times 10 = 4 \times \dots$ |
| (c) $5 \times 30 = 25 \times \dots$ | (d) $7000 \div 100 = 700 \div \dots$ |
| (e) $480 \div 20 = 2400 \div \dots$ | (f) $355 \times 12 = 1420 \times \dots$ |
8. A packet of crisps costs 32p. Calculate the cost of:
- | | | |
|----------------|----------------|-----------------|
| (a) 3 packets, | (b) 7 packets, | (c) 25 packets. |
|----------------|----------------|-----------------|
9. A meal at a burger bar costs £2.95. Calculate the cost of:
- | | | |
|--------------|--------------|--------------|
| (a) 2 meals, | (b) 3 meals, | (c) 5 meals. |
|--------------|--------------|--------------|
10. Joseph counts the number of sweets in a packet and find that there are 22. How many sweets are there in total in:
- | | | |
|----------------|------------------|-----------------|
| (a) 6 packets, | (b) 100 packets, | (c) 17 packets? |
|----------------|------------------|-----------------|
11. Three brothers are given 102 football stickers by their uncle. If they share them equally, how many stickers will they each have?

12. Four children are paid £42.60 for working as gardeners. How much will they each have if they share the money equally?

13. Stamps are 19p each.

Gwyn wants to buy 9 stamps.

He knows that he will have to pay *less* than £2.

(a) Write down how you can tell that he will have to pay less than £2 *without* working out the exact answer.

(b) Gwyn buys 9 stamps at 19p each.

Without using a calculator, work out exactly how much he must pay.

(KS3/95/Ma/Levels 4-6/P2)

14. Gwen makes kites to sell.

She sells the kites for £4.75 each.

(a) Gwen sells 26 kites.

Without using a calculator, work out how much money she gets for the 26 kites.


(b) Gwen has a box of 250 staples.

She uses 16 staples to make each kite.

Without using a calculator, work out how many complete kites she can make using the 250 staples.

(KS3/96/Ma/Tier 3-5/P1)

15. Here are some buttons on cards.



10

round buttons
on a card



5

star buttons
on a card



2

flower buttons
on a card

(a) Marc bought 9 cards of *star* buttons.

How many buttons did he buy altogether?


(b) Lee bought 8 cards of *round* buttons and
2 cards of *flower* buttons.

How many buttons did he buy altogether?

- (c) Sally bought *exactly* 16 buttons.
They were all the *same sort* of button.
What sort of buttons did Sally buy?
- (d) Pat bought *exactly* 15 buttons.
They were all the *same sort* of button.
What sort of buttons did Pat buy?
- (e) Pinder wants to buy *exactly* 20 buttons.
They must all be the *same sort* of button.
Pinder could buy:
2 cards of *round* buttons.
Write down *two* other possible answers for Pinder.

(KS3/96/Ma/Tier 3-5/P1)

16. Megan wants to plant 24 seeds.
She can plant them in 2 rows, with 12 seeds in each row.



- (a) Draw a diagram to show how she can plant 24 seeds in 3 rows, with the same number of seeds in each row.
- (b) Draw a diagram to show a *different* way that Megan can plant 24 seeds in a *different number* of rows, with the same number of seeds in each row.
- (c) Copy and complete the table to show how many rows Megan can make with 24 seeds, and how many seeds there are in each row.

<i>Number of rows</i>	<i>Number of seeds in each row</i>
1 row	24 seeds in a row
2 rows	12 seeds in a row
..... rows seeds in a row
..... rows seeds in a row
..... rows seeds in a row
8 rows	3 seeds in a row
12 rows	2 seeds in a row
24 rows	1 seed in a row

(d) Megan says:

"I can plant 24 seeds in 5 rows, with the same number of seeds in each row."

Explain why Megan is wrong.

You can write your answer, or draw a diagram.

(KS3/96/Ma/Tier 3-5/P2)

2.4 Problems in Context

Problems in context are dealt with in this section. You will need to decide which operation is required to solve each problem: you may need to *add*, *subtract*, *multiply* or *divide*. However, it is still recommended that you tackle these problems without a calculator, perhaps using it only to check your answers.



Example 1

It costs £1.25 for a child to go into a swimming pool. How much does it cost for 7 children to go in?



Solution

$$(a) \quad \begin{array}{r} 1.25 \\ \times \quad 7 \\ \hline 8.75 \\ \hline 1 \quad 3 \end{array}$$

The cost will be £8.75.



Example 2

There are 242 passengers on a train. At a station, 36 people get off and 27 people board the train. How many people are now on the train?



Solution

$$\begin{aligned} 242 - 36 + 27 &= 206 + 27 \\ &= 233 \end{aligned}$$

So 233 people are now on the train.



Example 3

Four children want to buy a computer game that costs £24.80. How much money must each of them contribute if they share the cost equally between them?



Solution

$$4 \overline{) 24.80} \quad \begin{array}{r} 6.20 \\ \underline{24.80} \\ 0 \end{array}$$

Each child must pay £6.20.



Exercises

- A blank tape costs 65p. Calculate the cost of:
 - 4 tapes,
 - 7 tapes,
 - 9 tapes.
- Alec spends £14.27 in a shop. He pays with a £20 note. How much change should he get?
- The cost of a carpet is £7.99 per square metre. Calculate the cost of:
 - 4 square metres,
 - 10 square metres,
 - 9 square metres.
- Simon is saving up to buy a tent that costs £72. So far he has saved £54.50. How much more does he need to save?
- Two neighbours agree to share equally the cost of a new fence. The fence costs £142. How much do they each have to pay?
- A cake weighs 824 grams. It is divided into 4 equal parts. How much does each part weigh?
- A car is driven at a speed of 45 mph. How far does it travel in:
 - 2 hours,
 - 5 hours,
 - 3.5 hours ?
- Cinema tickets cost £7 each. How many tickets could you buy with £63 ?

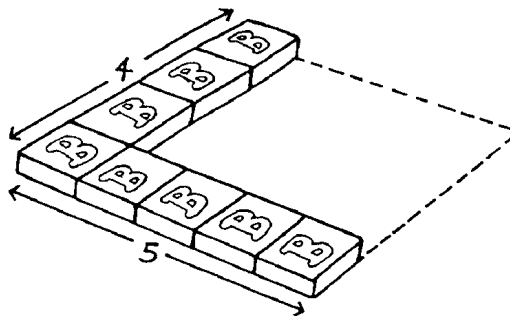
9. Cans of drink cost 42p each.
- (a) How much would 6 cans cost?
 - (b) Jane's mum pays for 6 cans with a £5 note. How much change should she have?
10. A school trip is arranged for 43 pupils accompanied by 2 teachers. A minibus carries 16 passengers. Three minibuses are booked for the trip. How many empty seats are there in the minibuses?
11. (a) A shop sells plants at 95p each.
Find the cost of 35 plants.
- (b) The shop also sells trees at £17 each.
Mr Bailey has £250.
He wants to buy as many trees as possible.
How many trees can Mr Bailey buy?
- (KS3/97/Ma/Tier 3-5/P1)
12. (a) Lucy had dinner.
It cost £13.40.
She paid with a £20 note.
How much change should Lucy get?
- (b) (i) 14 people had the set meal at the cafe at a cost of £6.40 each.
How much did they pay altogether?
- (ii) Another group of people had the set meal.
Altogether they paid £32.
How many people were in the group?
- (KS3/97/Ma/Tier3-5/P2)
13. Five people shared a bag of apples.
Each person had the *same number* of apples.
There were none left
- (a) How many apples could have been in the bag?
 - (b) Write another number of apples which could have been in the bag.
 - (c) Write another number of apples which could have been in the bag.

The five people shared a box of sweets.
 There were more than 100 sweets in the box.
 Each person had the same number of sweets.
 There were none left.

- (d) Anna says: "I think there were 113 sweets in the box."
 Explain why Anna must be wrong.
- (e) Write *two* different numbers of sweets which could have been in the box.
- (f) How can anyone tell that your numbers could be divided by 5 just by looking at how they end?

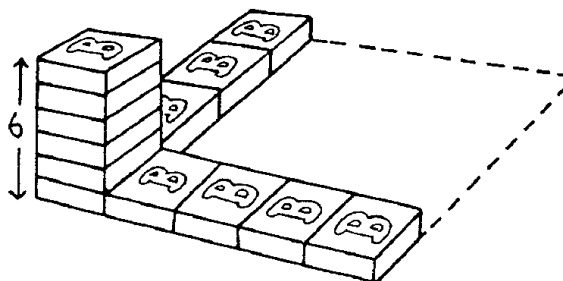
(KS3/94/Ma/Tier3-5/P2)

14. (a) Carl is putting packs of biscuits into a box.
 He starts to put in the bottom layer.
 The box holds 5 packs *across* and is 4 packs *wide*.



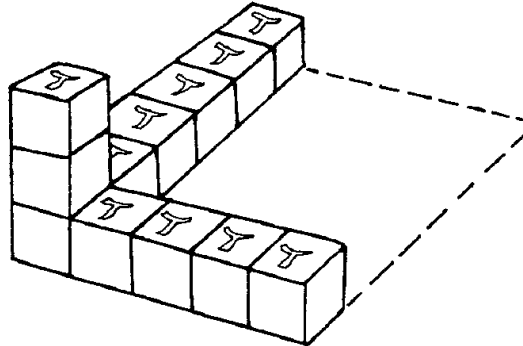
How many packs will fit altogether on the bottom layer?

The box holds 6 layers.



How many packs will fit in the box when it is *full*?

- (b) Aziz is putting packs of tea into a box.
 The box holds *5 packs across* and is *6 packs wide*.
 The box holds *3 layers*.



How many packs of tea will fit in the box when it is *full*?

- (c) Copy the words below, filling in the gaps to show one way of filling a *different* box with 24 packs in 2 layers.

total: 24 packs
 2 layers
 packs across
 packs wide

(KS3/97/Ma/Tier4-6/P2)

15. (a) A shop sells video tapes for £2.50 each.
 What is the cost of 16 video tapes?
- (b) The shop sells audio cassettes.
 Each cassette costs £1.49.
 What is the cost of 4 cassettes?
- (c) How many cassettes can you buy with £12?
- (d) The shop also sells cassettes in packs of three.
 A pack costs £3.99.
 How many packs can you buy with £12?
- (e) What is the *greatest number* of cassettes you can buy with £15?
 You can buy some packs and some single cassettes.

(KS3/98/Ma/Tier 3-5/P1)

16. Bill, Ravi and Eric are three divers in a competition.

Each type of dive has a *dive rating*.

Easy dives have a *low* rating; *hard dives* have a *high* rating.

Every dive is marked by five judges who each give a mark out of 10.

How to calculate the score for a dive:

1. Look at all five marks. Remove the highest and the lowest marks.
2. Add together the middle three marks to give a total.
3. Multiply this total by the dive rating.

- (a) Bill does a dive with a dive rating of 3.34.

The judges give the marks 7.0 7.5 8.0 8.0 8.5

What is Bill's score?

- (b) Ravi scored 82.68 on his first dive.

The dive had a dive rating of 3.18.

What was the *total* of the middle three marks given by the judges?

- (c) Eric is getting ready to take his final dive.

He needs to score at least 102.69 to win the competition.

Eric decides to do a dive with a dive rating of 3.26.

Explain why Eric has made a poor decision.

Show your working.

(KS3/96Ma/Tier 4-6/P1)

17. A class is planning a trip to a funfair.

The pupils have found out the prices at these two funfairs:

<p><i>Milltown Funfair</i></p> <p>Entry: £2.20</p> <p>plus</p> <p>Rides: 60p each</p>
--

<p><i>Seaview Funfair</i></p> <p>Entry: £4.50</p> <p>plus</p> <p>Rides: 20p each</p>

The teacher says that there will be time for 8 rides.

- (a) How much money do you need to get in to Milldown Funfair and have 8 rides?
- (b) How much money do you need to get in to Seaview Funfair and have 8 rides?

Ben has only £5 to get in and pay for his rides.

- (c) How many rides would Ben get at each funfair?

(KS3/94/Ma/Tier 3-5/P1)